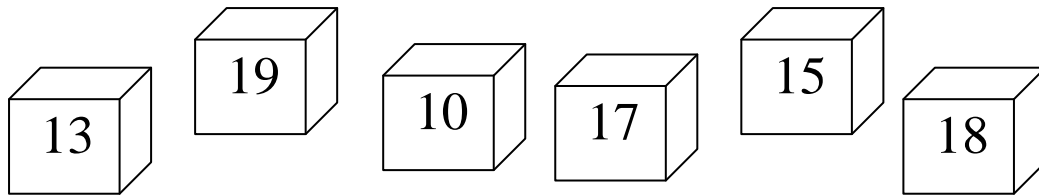


PL - počítame s desiatkou do 20

Meno: _____


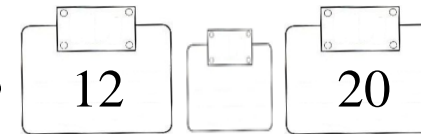
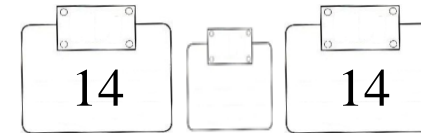
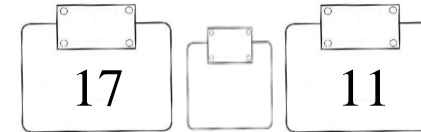
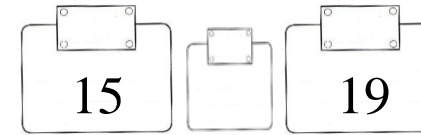
1. Usporiadaj čísla podľa veľkosti. Začni najmenším.



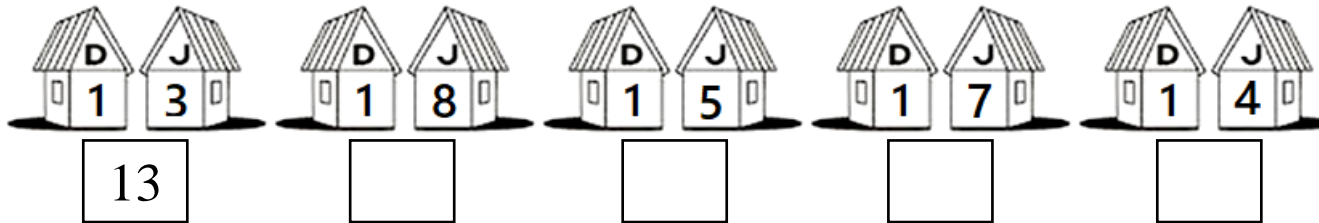
--	--	--	--	--	--



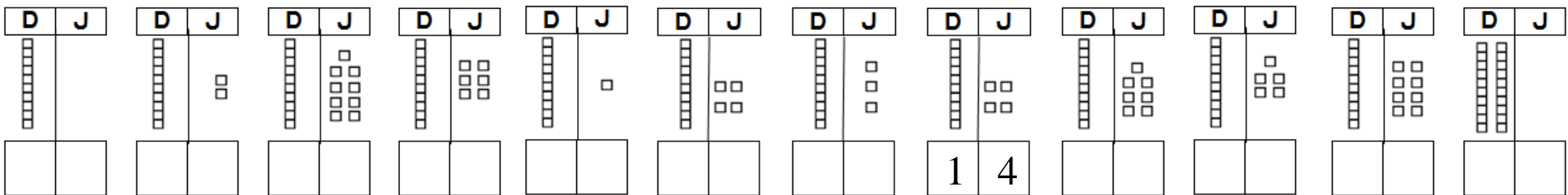
2. Porovnaj čísla a zapíš <, >, =.



3. Aké číslo býva v domčekoch? Dopíš podľa vzoru.



4. Dopíš do okienok počet desiatok a počet jednotiek podľa vzoru.



5. Vypočítaj reťazovku.

$$\boxed{13} - \boxed{3} = \text{cylinder} + \boxed{8} = \boxed{} - \boxed{10} = \boxed{} + \boxed{2}$$

