





Meno: _____


1. Vyfarbi správny výsledok


$5 + 4 =$ 


$9 - 4 =$ 


$3 + 2 =$ 

$10 - 2 =$ 



$4 + 4 =$ 



$7 - 6 =$ 



$1 + 7 =$ 

$8 - 3 =$ 


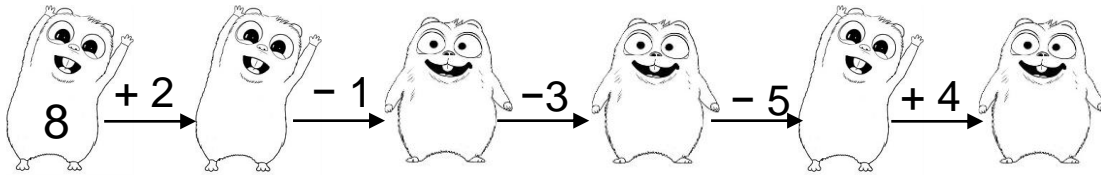
2. Porovnaj

3. Vypočítaj správne reťazovky



4. Dopln správne číslo v rozklade

